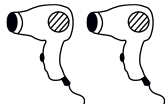


Mengen erfassen im Zahlenraum 5

a) Wie viele kannst du zählen?











b) Kreise ein!

Jeweils 3



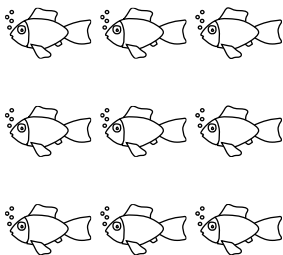
Jeweils 2




Jeweils 3



Jeweils 3



Jeweils 4



Jeweils 2

