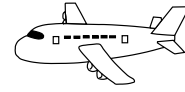
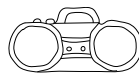
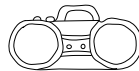


## Mengen erfassen im Zahlenraum 5

a) Wie viele kannst du zählen?



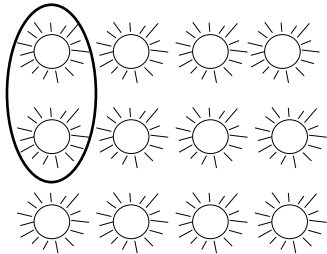








b) Kreise ein!

Jeweils 2



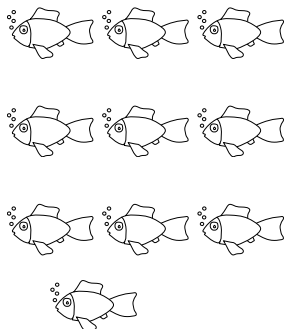
Jeweils 3




Jeweils 4



Jeweils 5



Jeweils 2



Jeweils 4

